



**BROAD HORIZON**  
— T U I T I O N —

# **11+ Basics Tuition**

**Year 4**

**Week 5**

**ANSWERS**

### **Task 3 – Maths**

**1)**  $5483 + 9842 = 15,325$

**3)**  $5839 - 3840 = 1999$

**5)** Round 1950 to the nearest 100 = 2000

**6)** Round 1299 to the nearest 1000 = 1000

**7)**  $45 \times 3 = 135$

**8)**  $631 \times 2 = 1262$

**9)**  $191 \times 5 = 955$

**10)**  $999 \times 8 = 7992$

**11)**  $999 \div 3 = 333$

**12)**  $482 \div 4 = 120 \text{ r}2$

**13)**  $3245 \div 3 = 1081 \text{ r}3$

Mental Arithmetic

<b>MENTAL ARITHMETIC : YEAR 3 : AUTUMN TERM : WEEK 10</b>			
<b>Paper 19</b>		<b>Paper 20</b>	
	<b>Answer</b>		<b>Answer</b>
1. What is half of 24?	<b>12</b>	1. What is half of 28?	<b>14</b>
2. What is half of 30?	<b>15</b>	2. What is half of 40?	<b>20</b>
3. Divide 8 by 4.	<b>2</b>	3. Divide 6 by 3.	<b>2</b>
4. Divide 10 by 5.	<b>2</b>	4. Divide 10 by 2.	<b>5</b>
5. How many fives make 20?	<b>4</b>	5. How many fives make 30?	<b>6</b>
6. How many twos make 12?	<b>6</b>	6. How many twos make 20?	<b>10</b>
7. Alan has 5 stickers. Joni has three times as many. How many stickers has Joni got?	<b>15</b>	7. Andy has 30 stickers. Duncan has half as many. How many stickers has Duncan got?	<b>15</b>
8. There are ten stamps in a row. Nadia has 4 rows. How many stamps does she have?	<b>40</b>	8. There are ten stamps in a row. Sandra has 5 rows. How many stamps does she have?	<b>50</b>
9. 20 sweets were shared equally between 4 children. How many did they get each?	<b>5</b>	9. 25 sweets were shared equally between 5 children. How many did they get each?	<b>5</b>
10. How many tens make 60?	<b>6</b>	10. How many tens make 80?	<b>8</b>

# English- Grammar

## Punctuation

### 12 Sentences p15

- 1 It is Asim's birthday today! He is eight years old. His party is on Saturday. Ten of his friends are coming.
- 2 Claire lived with her Mum in a fourth floor flat. She wanted a pet. She really wanted a puppy. Her Mum said that a budgie would be a better pet to have in a flat. This made Claire upset. She couldn't take a budgie for a walk.
- 3 a Do Mr and Mrs Smith live in the United Kingdom?  
b Doctor and Professor Jones are from the United States.  
c Look out! There's a car coming.


### 13 Question and exclamation marks p16

- 1 a ?      b .      c ?      d ?      e .
- 2 a .      b !!!      c .      d !      e !/!/.
- 3 !/!/!/?!./?/!/?!./!/.


### 14 Speech marks p17

- 1 a "It's snowing," cried Eamon.  
b "We could go outside and build a snowman," suggested Shannon.  
c Mum laughed, "There's not enough snow!"  
d "But I don't mind if it's a tiny snowman," Eamon pleaded.
- 2 a "It's Katie's birthday party tonight," whispered Sophie.  
b "I'm really looking forward to it," replied Amy.  
c Emma leaned over and said, "What are you going to wear?"  
d "I might wear my new jeans," Sophie answered.


## Tell the Time: Writing the Time Answers




3 o'clock




half past 9




1 o'clock




12 o'clock




half past 7




half past 8




5 o'clock




half past 2




6 o'clock



half past 10




half past 11




4 o'clock

# Tell the Time: Drawing the Time


## Answers




9 o'clock




half past 3




5 o'clock




1 o'clock




half past 7




half past 8




10 o'clock




half past 12




11 o'clock



half past 4



half past 6



2 o'clock



visit [twinkl.com](https://www.twinkl.com)



### TELLING THE TIME TO 5 MINUTES SHEET 3 ANSWERS



2:20	6:10	4:25	8:50
12:30	7:15	9:35	11:05
1:55	3:40	10:45	5:00
7:35	9:15	12:50	2:10

TELLING THE TIME TO 5 MINUTES SHEET 3A ANSWERS



20 past 2	10 past 6	25 past 4	10 to 9
Half past 12	Quarter past 7	25 to 10	5 past 11
5 to 2	20 to 4	Quarter to 11	5 o'clock
25 to 8	Quarter past 9	10 to 1	10 past 2

Name

Date

TELLING THE TIME TO 1 MINUTE SHEET 4 ANSWERS



9:22	7:28	1:34	9:53
12:17	6:44	6:13	4:51
12:20	2:37	8:42	10:58
1:04	1:51	5:34	3:55



## Pages 35-39 — Assessment Test 2

- 1) **C** — In the passage it says they were on a "long lakeside walk".
  - 2) **D** — In the passage it says the "long, hot afternoon was slowly turning cooler", which shows that it was the late afternoon.
  - 3) **C** — In the passage it says that running "wasn't easy as they had rucksacks on their backs".
  - 4) **D** — The only item that isn't mentioned is a picnic blanket.
  - 5) **B** — In the passage it says that every so often they had to "dash around a muddy puddle" — "dash around" is another way of saying 'avoid'.
  - 6) **D** — In the passage it says "They had made it", which means both of them caught the ferry.
  - 7) **A** — "despair" means 'without hope' — Helen doesn't believe that they can make it back to the boat in time.
  - 8) **C** — "retrace their steps" means 'walk back the way they had come'.
- 
- 24) **joyful** — 'sad' means 'unhappy', whereas 'joyful' means 'happy'.
  - 25) **cold** — 'hot' means 'at a high temperature', whereas 'cold' means 'at a low temperature'.
  - 26) **huge** — 'little' means 'small', whereas 'huge' means 'very big'.
  - 27) **never** — 'always' means 'at all times', whereas 'never' means 'at no time'.
  - 28) **unfair** — 'fair' means 'just', whereas 'unfair' means 'unjust'.
  - 29) **awake** — 'asleep' means 'sleeping', whereas 'awake' means 'not sleeping'.
  - 30) **wealthy** — 'Rich' and 'wealthy' both mean 'having lots of money'.
  - 31) **sweater** — 'Jumper' and 'sweater' are both words for the same item of clothing.
  - 32) **cash** — 'Money' and 'cash' are both words which describe the coins and notes you use to pay for things.
  - 33) **story** — 'Tale' and 'story' both mean 'a description of events'.
  - 34) **miserable** — 'Sad' and 'miserable' both mean 'unhappy'.
  - 35) **friend** — 'Pal' and 'friend' both mean 'someone you like to spend time with'.