



BROAD HORIZON
— T U I T I O N —

11+ Basics Tuition

Year 4


Week 6

ANSWERS

Starter Task

Write the time shown on the clocks

1)



10:12

3)



10:10

2)



10:07 , accept 10:08

Write the value of the number pointed at by the arrow ^

The first one has been done for you

4) $\underset{\wedge}{11},874$ **11,000**

5) $67,\underset{\wedge}{8}34$ **30**

6) $45,\underset{\wedge}{4}73$ **400**

7) $83,\underset{\wedge}{3}54$ **3000**

8) $365 \div 5 = 73$

9) $784 \div 7 = 112$

You will have 45 seconds to complete the table below from memory.

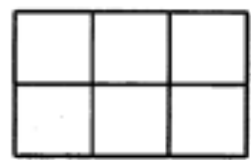
1) $8 \times 7 = 56$	2) $3 \times 9 = 27$	3) $9 \times 12 = 108$
4) $12 \times 11 =$ 132	5) $8 \times 9 = 72$	6) $6 \times 5 = 30$
7) $9 \times 9 = 81$	8) $7 \times 3 = 21$	9) $4 \times 6 = 24$
10) $2 \times 12 = 24$	11) $3 \times 8 = 24$	12) $3 \times 6 = 18$
13) $8 \times 6 = 48$	14) $7 \times 7 = 49$	15) $8 \times 3 = 24$

Mental Arithmetic


MENTAL ARITHMETIC : YEAR 3 : SPRING TERM : WEEK 4					
Paper 7		Answer	Paper 8		Answer
1. Write 356p as pounds.		£3.56	1. Write 476p as pounds.		£4.76
2. Write 307p as pounds.		£3.07	2. Write 409p as pounds.		£4.09
3. How much money have I got if I have two £1 coins and three 50p pieces?		£3.50	3. How much money have I got if I have four £1 coins and four 50p pieces?		£6
4. How much money have I got if I have two £1 coins and three 20p pieces?		£2.60	4. How much money have I got if I have one £1 coin and four 20p pieces?		£1.80
5. It costs £3 to go to the cinema. How much will it cost for 4 people to go?		£12	5. It costs £4 to go to the theatre. How much will it cost for 5 people to go?		£20
6. It costs £20 to watch a game of football. How much will it cost for 3 people to watch?		£60	6. It costs £20 to watch a game of football. How much will it cost for 4 people to watch?		£80
7. Isabel gets 50p pocket money each week. She saves her pocket money for 4 weeks. How much has she saved?		£2	7. Sophie gets 50p pocket money each week. She saves her pocket money for 6 weeks. How much has she saved?		£3
8. Stella saved 20p a week for 10 weeks. How much has she saved?		£2	8. Rachel saved 10p a week for 20 weeks. How much has she saved?		£2
9. How many 20p pieces in a pound?		5	9. How many 10p pieces in a pound?		10
10. How many 20p pieces in £2?		10	10. How many 10p pieces in £2?		20

Equivalent Fractions $\frac{1}{2}$

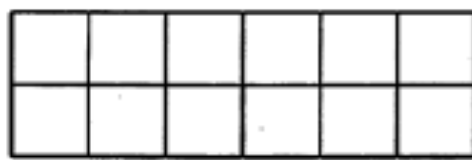
Shade $\frac{1}{2}$ of each shape. Look at how many squares are shaded (numerator) and the total amount of squares (denominator) and write the equivalent fraction underneath.




1. $\frac{3}{6}$



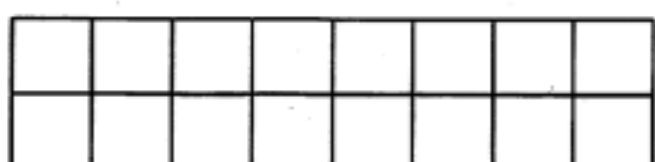
2. $\frac{4}{8}$




3. $\frac{6}{12}$



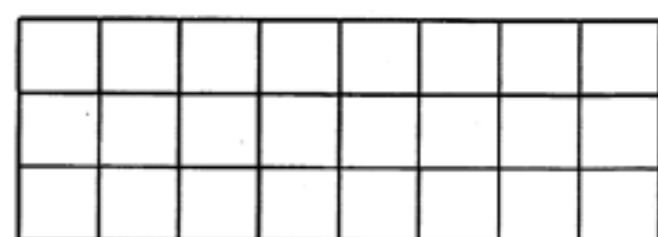
4. $\frac{6}{12}$




5. $\frac{8}{16}$



6. $\frac{9}{18}$



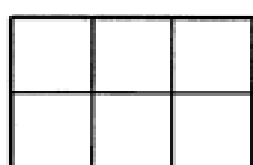
7. $\frac{12}{24}$




8. $\frac{12}{24}$

Equivalent Fractions $\frac{1}{3}$

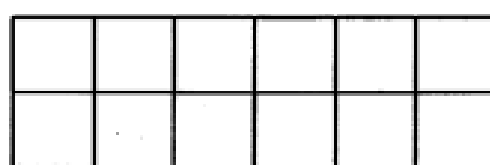
Shade $\frac{1}{3}$ of each shape. Look at how many squares are shaded (numerator) and the total amount of squares (denominator) and write the equivalent fraction underneath.




1. $\frac{2}{6}$




2. $\frac{3}{9}$




3. $\frac{4}{12}$




4. $\frac{4}{12}$




5. $\frac{5}{15}$



6. $\frac{6}{18}$




7. $\frac{7}{21}$




8. $\frac{8}{24}$

Equivalent Fractions $\frac{1}{4}$


Shade $\frac{1}{4}$ of each shape. Look at how many squares are shaded (numerator) and the total amount of squares (denominator) and write the equivalent fraction underneath.




1. $\frac{1}{4}$




2. $\frac{3}{12}$




3. $\frac{3}{12}$




4. $\frac{3}{12}$




5. $\frac{5}{20}$



6. $\frac{6}{24}$



7. $\frac{6}{24}$



8. $\frac{6}{24}$

Question	Answer
1	4
2	5
3	16
4	5
5	8
6	8
7	1
8	16
9	1
10	6
11	20
12	4

Question	Answer
13	5
14	1
15	6
16	2
17	4
18	10
19	6
20	10
21	5
22	2
23	1
24	6

English

Pages 40-44 — Assessment Test 3

- 1) **D** — In the letter Nisha says that she lives "close to the seaside".
- 2) **D** — Nisha says she thought she would "swim in the sea every day".
- 3) **C** — Nisha wonders "if it is ever hot in England".
- 4) **C** — Nisha says "Mum made me wear so many clothes that I couldn't move my arms properly".
- 5) **B** — Nisha says they sledged "down a hill".
- 6) **C** — Nisha says "I played with the children next door".
- 7) **A** — "glittering" means 'sparkling'.
- 8) **B** — "I couldn't believe my eyes" means 'I was very surprised by what I saw'.

English – Grammar


Collective Nouns

25 Collective nouns p32

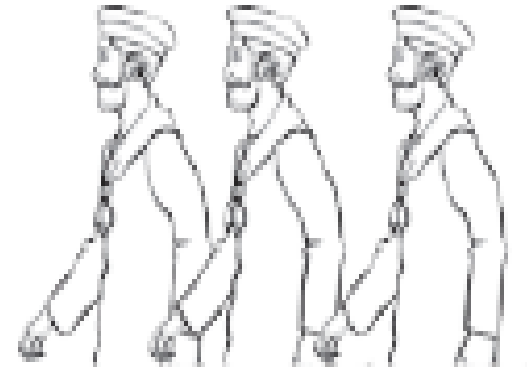
- | | | | | |
|---|-----------------------------|-----------------|-------------------------------|-----------------|
| 1 | a herd | b flock | c litter | d shoal |
| | e gaggle | f pack | g swarm | h flight |
| 2 | a a cast of actors | | b a board of directors | |
| | c a tribe of natives | | d a crew of sailors | |
| 3 | a batch | b galaxy | c clutch | d brood |
| | e bunch | f deck | | |

Collective Nouns


Collective nouns are used to name groups of things.



a school of fish



a crew of sailors



a cluster of computers



a pride of lions

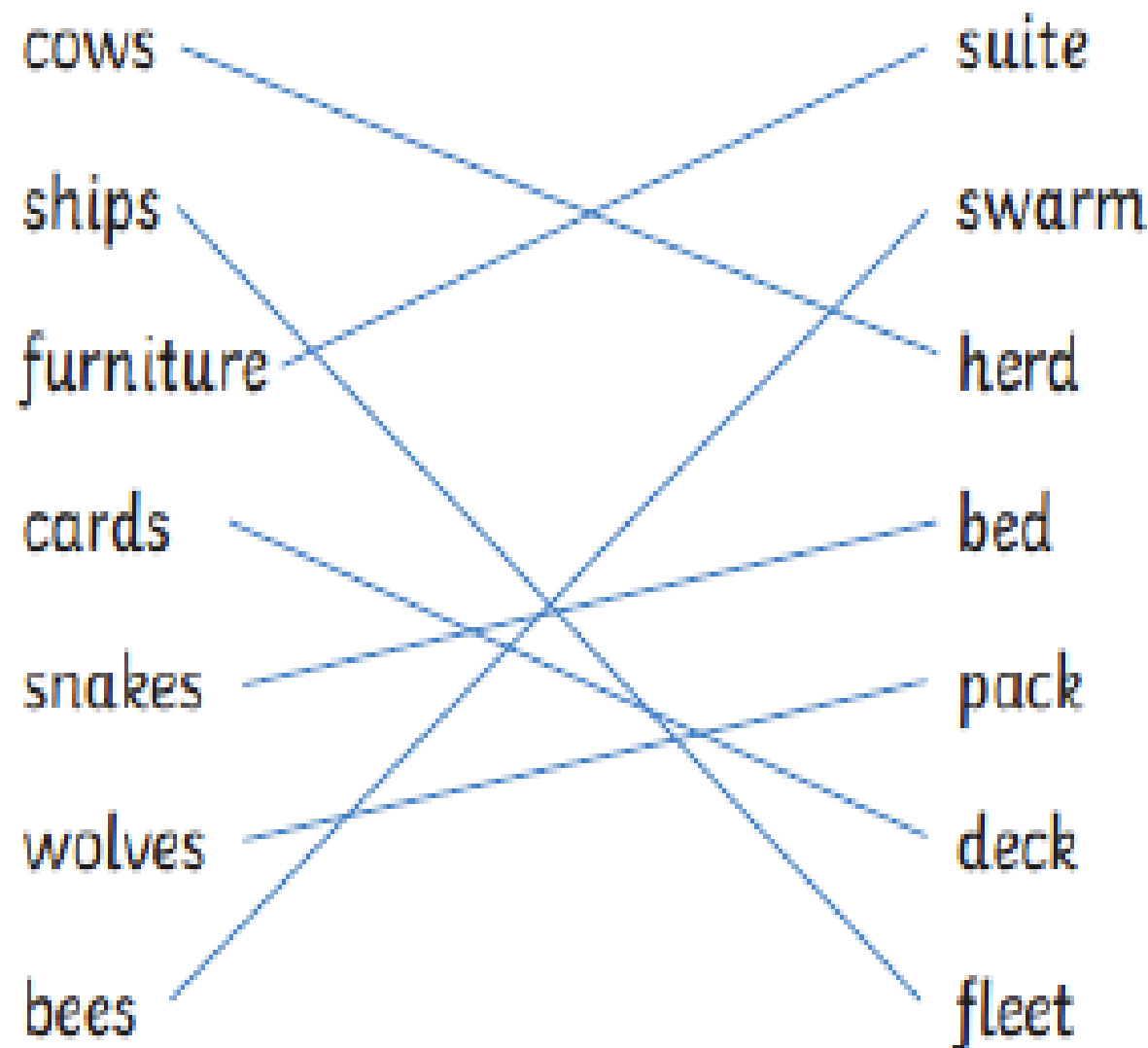


a herd of horses



a gaggle of geese

Match the noun with its collective term.



Correct the Spelling Mistake

Year 3 and 4 Correct the Spelling Mistake (3)

The spelling mistakes in these sentences have been circled. Write the correct spelling for each word in the box.

1. Tying your own shoelaces can be dificelt.
2. My grandad made a coin apeer from behind my ear.
3. Do you promiss to behave yourself today?
4. We're back to doing our regeler lessons today.
5. Rulers are very helpful when you want to draw a strayt line.
6. I've made my uncle a speshal card for his birthday.
7. "I am hungry; therfor, I will eat the cake," the princess announced.
8. Last week, we all watched a poplar TV show together.

difficult
appear
promise
regular
straight
special
therefore
popular

Each sentence below has one word which is spelt incorrectly. Circle the incorrect word and write the correct spelling in the box.

1. Did I menshun that the winner would receive a prize?
2. Achelly, I think you'll find that I was right all along.
3. Amazingly, this coin was buried over a senturie ago!
4. Althow I like eating peas, I don't enjoy eating pea soup.
5. Gisela's dress was made from a very shiny mateeriel.
6. "That's enuff!" exclaimed the unsuccessful dog trainer.
7. My stepsister has a real inturest in model trains.
8. When the rollercoaster lurched forward's, we all screamed.

mention
actually
century
although
material
enough
interest
forward's

30) ill — 'Well' means 'healthy', whereas 'ill' means 'unhealthy'.

31) move — 'Stop' means 'be still', whereas 'move' means 'be in motion'.

32) fat — 'Thin' means 'narrow', whereas 'fat' means 'wide'.

33) begin — 'End' means 'finish', whereas 'begin' means 'start'.

34) messy — 'Neat' means 'tidy', whereas 'messy' means 'untidy'.

35) lie — 'Truth' means 'something true', whereas 'lie' means 'something false'.